

L-16 Construction of Moore machine-

3

Construction of Moore Machine- Examples (Part-2)

For the following Moore Machine the input alphabet is $\Sigma = \{a,b\}$ and the output alphabet is $\Delta = \{0,1\}$. Run the following input sequences and find the respective outputs:

(i) aabab (ii) abbb (iii) ababb

States	a	b	Outputs
$\rightarrow q_0$	q_1	q_2	0
q_1	q_2	q_3	0
q_2	q_3	q_4	1
q_3	q_4	q_4	0
q_4	q_0	q_0	0

Construction of Moore Machine- Examples (Part-2)

For the following Moore Machine the input alphabet is $\Sigma = \{a,b\}$ and the output alphabet is $\Delta = \{0,1\}$. Run the following input sequences and find the respective outputs:

(i) aabab (ii) abbb (iii) ababb

i) a a b a b

States	a	b	Outputs
$\rightarrow q_0$	q_1	q_2	0
q_1	q_2	q_3	0
q_2	q_3	q_4	1
q_3	q_4	q_4	0
q_4	q_0	q_0	0

Construction of Moore Machine- Examples (Part-2)

For the following Moore Machine the input alphabet is $\Sigma = \{a,b\}$ and the output alphabet is $\Delta = \{0,1\}$. Run the following input sequences and find the respective outputs:

(i) aabab (ii) abbb (iii) ababb

States	a	b	Outputs
$\rightarrow q_0$	q_1	q_2	0
q_1	q_2	q_3	0
q_2	q_3	q_4	1
q_3	q_4	q_4	0
q_4	q_0	q_0	0

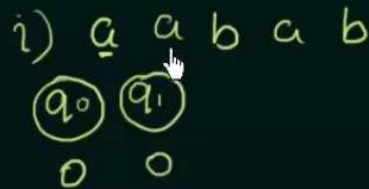
i) a a b a b
 q_0
0

Construction of Moore Machine- Examples (Part-2)

For the following Moore Machine the input alphabet is $\Sigma = \{a,b\}$ and the output alphabet is $\Delta = \{0,1\}$. Run the following input sequences and find the respective outputs:

(i) aabab (ii) abbb (iii) ababb

States	a	b	Outputs
$\rightarrow q_0$	q_1	q_2	0
q_1	q_2	q_3	0
q_2	q_3	q_4	1
q_3	q_4	q_4	0
q_4	q_0	q_0	0



Construction of Moore Machine- Examples (Part-2)

For the following Moore Machine the input alphabet is $\Sigma = \{a,b\}$ and the output alphabet is $\Delta = \{0,1\}$. Run the following input sequences and find the respective outputs:

(i) aabab (ii) abbb (iii) ababb

States	a	b	Outputs
$\rightarrow q_0$	q_1	q_2	0
q_1	q_2	q_3	0
q_2	q_3	q_4	1
q_3	q_4	q_4	0
q_4	q_0	q_0	0

i) a a b a b
 q_0 q_1 q_2
0 0 1

Construction of Moore Machine- Examples (Part-2)

For the following Moore Machine the input alphabet is $\Sigma = \{a,b\}$ and the output alphabet is $\Delta = \{0,1\}$. Run the following input sequences and find the respective outputs:

(i) aabab (ii) abbb (iii) ababb

States	a	b	Outputs
$\rightarrow q_0$	q_1	q_2	0
q_1	q_2	q_3	0
q_2	q_3	q_4	1
q_3	q_4	q_4	0
q_4	q_0	q_0	0

i) $\underline{a} \ \underline{a} \ \underline{b} \ a \ b$
 $\textcircled{q_0} \ \textcircled{q_1} \ \textcircled{q_2} \ \textcircled{q_4}$
0 0 1 0

Construction of Moore Machine- Examples (Part-2)

For the following Moore Machine the input alphabet is $\Sigma = \{a,b\}$ and the output alphabet is $\Delta = \{0,1\}$. Run the following input sequences and find the respective outputs:

(i) aabab (ii) abbb (iii) ababb

States	a	b	Outputs
$\rightarrow q_0$	q_1	q_2	0
q_1	q_2	q_3	0
q_2	q_3	q_4	1
q_3	q_4	q_4	0
q_4	q_0	q_0	0




Construction of Moore Machine- Examples (Part-2)

For the following Moore Machine the input alphabet is $\Sigma = \{a,b\}$ and the output alphabet is $\Delta = \{0,1\}$. Run the following input sequences and find the respective outputs:

(i) aabab (ii) abbb (iii) ababb

States	a	b	Outputs
$\rightarrow q_0$	q_1	q_2	0
q_1	q_2	q_3	0
q_2	q_3	q_4	1
q_3	q_4	q_4	0
q_4	q_0	q_0	0



Construction of Moore Machine- Examples (Part-2)

For the following Moore Machine the input alphabet is $\Sigma = \{a,b\}$ and the output alphabet is $\Delta = \{0,1\}$. Run the following input sequences and find the respective outputs:

(i) aabab (ii) abbb (iii) ababb

States	a	b	Outputs
$\rightarrow q_0$	q_1	q_2	0
q_1	q_2	q_3	0
q_2	q_3	q_4	1
q_3	q_4	q_4	0
q_4	q_0	q_0	0



Construction of Moore Machine- Examples (Part-2)

For the following Moore Machine the input alphabet is $\Sigma = \{a,b\}$ and the output alphabet is $\Delta = \{0,1\}$. Run the following input sequences and find the respective outputs:

(i) aabab (ii) abbb (iii) ababb

States	a	b	Outputs
$\rightarrow q_0$	q_1	q_2	0
q_1	q_2	q_3	0
q_2	q_3	q_4	1
q_3	q_4	q_4	0
q_4	q_0	q_0	0

i) a a b a b
 q_0 q_1 q_2 q_4 q_0 q_2
 0 0 1 0 0 1

ii) a b b b
 q_0 q_1
 0 0

Construction of Moore Machine- Examples (Part-2)

For the following Moore Machine the input alphabet is $\Sigma = \{a,b\}$ and the output alphabet is $\Delta = \{0,1\}$. Run the following input sequences and find the respective outputs:

(i) aabab (ii) abbb (iii) ababb

States	a	b	Outputs
$\rightarrow q_0$	q_1	q_2	0
q_1	q_2	q_3	0
q_2	q_3	q_4	1
q_3	q_4	q_4	0
q_4	q_0	q_0	0

i) a a b a b
 q_0 q_1 q_2 q_4 q_0 q_2
 0 0 1 0 0 1


ii) a b b b
 q_0 q_1 q_3
 0 0 0

Construction of Moore Machine- Examples (Part-2)

For the following Moore Machine the input alphabet is $\Sigma = \{a,b\}$ and the output alphabet is $\Delta = \{0,1\}$. Run the following input sequences and find the respective outputs:

(i) aabab (ii) abbb (iii) ababb

States	a	b	Outputs
$\rightarrow q_0$	q_1	q_2	0
q_1	q_2	q_3	0
q_2	q_3	q_4	1
q_3	q_4	q_4	0
q_4	q_0	q_0	0





Construction of Moore Machine- Examples (Part-2)

For the following Moore Machine the input alphabet is $\Sigma = \{a,b\}$ and the output alphabet is $\Delta = \{0,1\}$. Run the following input sequences and find the respective outputs:

(i) aabab (ii) abbb (iii) ababb

States	a	b	Outputs
$\rightarrow q_0$	q_1	q_2	0
q_1	q_2	q_3	0
q_2	q_3	q_4	1
q_3	q_4	q_4	0
q_4	q_0	q_0	0



For the following Moore Machine the input alphabet is $\Sigma = \{a,b\}$ and the output alphabet is $\Delta = \{0,1\}$. Run the following input sequences and find the respective outputs:

(i) aabab (ii) abbb (iii) ababb

States	a	b	Outputs
$\rightarrow q_0$	q_1	q_2	0
q_1	q_2	q_3	0
q_2	q_3	q_4	1
q_3	q_4	q_4	0
q_4	q_0	q_0	0

i) a a b a b
 (q_0) (q_1) (q_2) (q_4) (q_0) (q_2)
 0 0 1 0 0 1

ii) a b b b
 (q_0) (q_1) (q_3) (q_4) (q_0)
 0 0 0 0 0

iii) a b a b b

For the following Moore Machine the input alphabet is $\Sigma = \{a,b\}$ and the output alphabet is $\Delta = \{0,1\}$. Run the following input sequences and find the respective outputs:

(i) aabab (ii) abbb (iii) ababb

States	a	b	Outputs
$\rightarrow q_0$	q_1	q_2	0
q_1	q_2	q_3	0
q_2	q_3	q_4	1
q_3	q_4	q_4	0
q_4	q_0	q_0	0

i) a a b a b
 (q_0) (q_1) (q_2) (q_4) (q_0) (q_2)
 0 0 1 0 0 1

ii) a b b b
 (q_0) (q_1) (q_3) (q_4) (q_0)
 0 0 0 0 0

iii) a b a b b
 (q_0)
 0

For the following Moore Machine the input alphabet is $\Sigma = \{a,b\}$ and the output alphabet is $\Delta = \{0,1\}$. Run the following input sequences and find the respective outputs:

(i) aabab (ii) abbb (iii) ababb

States	a	b	Outputs
$\rightarrow q_0$	q_1	q_2	0
q_1	q_2	q_3	0
q_2	q_3	q_4	1
q_3	q_4	q_4	0
q_4	q_0	q_0	0

i) a a b a b
 (q_0) (q_1) (q_2) (q_4) (q_0) (q_2)
 0 0 1 0 0 1

ii) a b b b
 (q_0) (q_1) (q_3) (q_4) (q_0)
 0 0 0 0 0

iii) a b a b b
 (q_0) (q_1)
 0 0

For the following Moore Machine the input alphabet is $\Sigma = \{a,b\}$ and the output alphabet is $\Delta = \{0,1\}$. Run the following input sequences and find the respective outputs:

(i) aabab (ii) abbb (iii) ababb

States	a	b	Outputs
$\rightarrow q_0$	q_1	q_2	0
q_1	q_2	q_3	0
q_2	q_3	q_4	1
q_3	q_4	q_4	0
q_4	q_0	q_0	0

i) a a b a b
 (q_0) (q_1) (q_2) (q_4) (q_0) (q_2)
 0 0 1 0 0 1




ii) a b b b
 (q_0) (q_1) (q_3) (q_4) (q_0)
 0 0 0 0 0

iii) a b a b b
 (q_0) (q_1) (q_3)
 0 0 0

For the following Moore Machine the input alphabet is $\Sigma = \{a,b\}$ and the output alphabet is $\Delta = \{0,1\}$. Run the following input sequences and find the respective outputs:

(i) aabab (ii) abbb (iii) ababb




States	a	b	Outputs
$\rightarrow q_0$	q_1	q_2	0
q_1	q_2	q_3	0
q_2	q_3	q_4	1
q_3	q_4	q_4	0
q_4	q_0	q_0	0



For the following Moore Machine the input alphabet is $\Sigma = \{a,b\}$ and the output alphabet is $\Delta = \{0,1\}$. Run the following input sequences and find the respective outputs:

(i) aabab (ii) abbb (iii) ababb

States	a	b	Outputs
$\rightarrow q_0$	q_1	q_2	0
q_1	q_2	q_3	0
q_2	q_3	q_4	1
q_3	q_4	q_4	0
q_4	q_0	q_0	0



For the following Moore Machine the input alphabet is $\Sigma = \{a,b\}$ and the output alphabet is $\Delta = \{0,1\}$. Run the following input sequences and find the respective outputs:

(i) aabab (ii) abbb (iii) ababb

States	a	b	Outputs
$\rightarrow q_0$	q_1	q_2	0
q_1	q_2	q_3	0
q_2	q_3	q_4	1
q_3	q_4	q_4	0
q_4	q_0	q_0	0

i) a a b a b
 (q_0) (q_1) (q_2) (q_4) (q_0) (q_2)
 0 0 1 0 0 1

ii) a b b b
 (q_0) (q_1) (q_3) (q_4) (q_0)
 0 0 0 0 0

iii) a b a b b
 (q_0) (q_1) (q_3) (q_4) (q_0) (q_2)
 0 0 0 0 0 1

• **Questions????**